

Student: _____
Date: _____
Time: _____

Instructor: Garth Isaak
Course: precalc blitzer (1)
Book: Blitzer: Precalculus Essentials, 3e

Assignment: Polynomial etc functions
practice diagnostic 1a

1. Find the x-intercepts of the polynomial function. State whether the graph crosses the x-axis, or touches the x-axis and turns around, at each intercept.

$$f(x) = (x - 2)^2(x^2 - 25)$$

- A. 2, touches the x-axis and turns around;
-5, crosses the x-axis;
5, crosses the x-axis
- B. 2, touches the x-axis and turns around;
-5, touches the x-axis and turns around;
5, touches the x-axis and turns around
- C. -2, touches the x-axis and turns around;
25, crosses the x-axis
- D. 2, touches the x-axis and turns around;
25, touches the x-axis and turns around

2. Divide.

$$\frac{x^4 - 3x^3 - 3x^2 + 16x - 36}{x^2 - 4x + 4}$$

- A. $x^2 - 8x + 33 + \frac{-160x + 144}{x^2 - 4x + 4}$
- B. $x^2 + x - 3$
- C. $x^2 + x - 3 - \frac{24}{x^2 - 4x + 4}$
- D. $x^2 - 8x + 33$

3. Find the vertical asymptotes, if any, of the graph of the rational function.

$$f(x) = \frac{x - 4}{x(x + 4)}$$

- A. $x = 0$ and $x = -4$
- B. $x = 4$ and $x = -4$
- C. $x = -4$
- D. no vertical asymptote

Student: _____
Date: _____
Time: _____

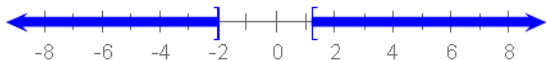
Instructor: Garth Isaak
Course: precalc blitzer (1)
Book: Blitzer: Precalculus Essentials, 3e

Assignment: Polynomial etc functions
practice diagnostic 1a

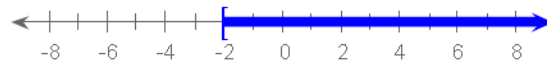
4. Solve the polynomial inequality and graph the solution set on a number line. Express the solution set in interval notation.

$$(4x - 5)(x + 2) \leq 0$$

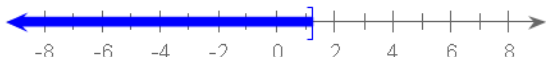
A. $(-\infty, -2] \cup [(5/4), \infty)$



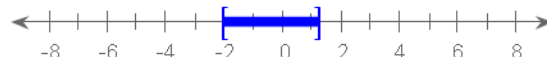
B. $[-2, \infty)$



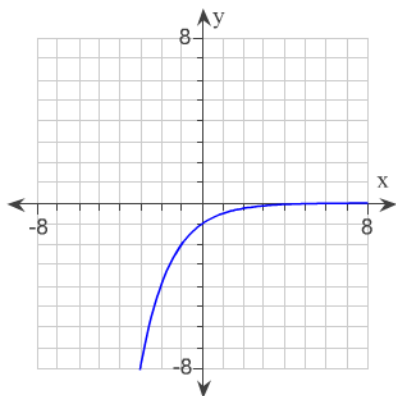
C. $(-\infty, (5/4)]$



D. $[-2, (5/4)]$



5. The graph of an exponential function is given. Select the function for the graph from the functions listed.



- A. $f(x) = -2^x$
 B. $f(x) = 2^x$
 C. $f(x) = -2^{-x}$
 D. $f(x) = 2^{-x}$

6. Evaluate the expression without using a calculator.

$$\ln e^{3x}$$

- A. $-3x$
 B. $3x$
 C. e^{3x}
 D. $\frac{1}{3x}$

Student: _____

Date: _____

Time: _____

Instructor: Garth Isaak

Course: precalc blitzer (1)

Book: Blitzer: Precalculus Essentials, 3e

Assignment: Polynomial etc functions

practice diagnostic 1a

7. Solve the equation by expressing each side as a power of the same base and then equating exponents.

$$2^{(x-9)/6} = \sqrt{2}$$

- A. {21}
- B. {(33 / 3)}
- C. {12}
- D. {15}
-

Student: _____
Date: _____
Time: _____

Instructor: Garth Isaak
Course: precalc blitzer (1)
Book: Blitzer: Precalculus Essentials, 3e

Assignment: Polynomial etc functions
practice diagnostic 1a

1. A

2. C

3. A

4. D

5. C

6. B

7. C
